








Lets review what we have learnt. Match the figure with the correct fraction and fraction name one has been done for you

$\frac{1}{2}$		five sixths
$\frac{2}{3}$		one half
$\frac{1}{4}$		one third
$\frac{1}{3}$		one fifth
$\frac{3}{4}$		two thirds
$\frac{1}{5}$		three fourths
$\frac{5}{6}$		one fourths

Dashed lines connect $\frac{3}{4}$ to the square figure and $\frac{5}{6}$ to the circle figure.