


Color the boxes as per the Fractions given and write the number in
Decimals and Fractions




Fraction

$$\frac{3}{10}$$

Decimal

Percentage




Fraction

$$\frac{4}{10}$$

Decimal

Percentage




Fraction

$$\frac{8}{10}$$

Decimal

Percentage




Fraction

$$\frac{6}{10}$$

Decimal

Percentage




Fraction

$$\frac{2}{10}$$

Decimal

Percentage



Fraction

$$\frac{9}{10}$$

Decimal

Percentage

