


Color the boxes as per the decimals given and write the number in Percentage and Fractions




Fraction

$$\frac{1}{4}$$

Decimal

Percentage




Fraction

$$\frac{17}{50}$$

Decimal

Percentage




Fraction

$$\frac{3}{5}$$

Decimal

Percentage




Fraction

$$\frac{7}{10}$$

Decimal

Percentage




Fraction

$$\frac{4}{5}$$

Decimal

Percentage



Fraction

$$\frac{3}{5}$$

Decimal

Percentage

