
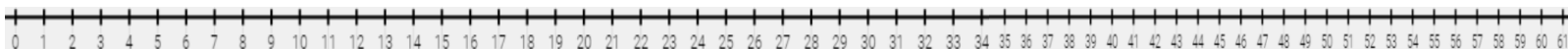


Find the missing number by jumping in 10's and 1's


$$23 + \underline{\quad} = \underline{\quad} + \underline{\quad} + \underline{\quad} = \underline{\quad} + \underline{\quad} = 42$$




$$\underline{\quad} + 21 = \underline{\quad} + \underline{\quad} + \underline{\quad} = \underline{\quad} + \underline{\quad} = 50$$




$$38 + \underline{\quad} = \underline{\quad} + \underline{\quad} + \underline{\quad} = \underline{\quad} + \underline{\quad} = 54$$



$$\underline{\quad} + 19 = \underline{\quad} + \underline{\quad} + \underline{\quad} = \underline{\quad} + \underline{\quad} = 37$$



$$26 + \underline{\quad} = \underline{\quad} + \underline{\quad} + \underline{\quad} = \underline{\quad} + \underline{\quad} = 47$$



$$22 + \underline{\quad} = \underline{\quad} + \underline{\quad} + \underline{\quad} = \underline{\quad} + \underline{\quad} = 40$$

